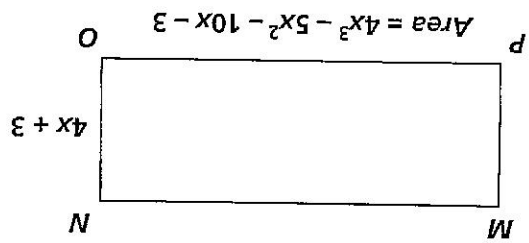


Chapters 1–13 Final Mastery Test, continued

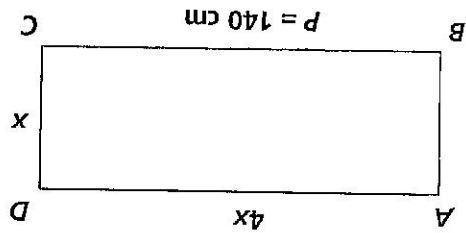
*Directions* Solve.

33. Find the length of the rectangle in terms of  $x$ .



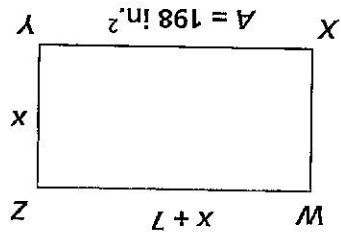
\_\_\_\_\_

34. Find the length and width of rectangle  $ABCD$ .



\_\_\_\_\_

35. Find the length and width of rectangle  $WXYZ$ .



\_\_\_\_\_