

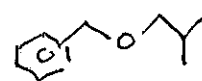
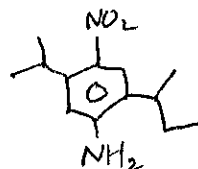
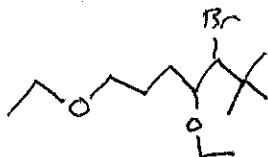
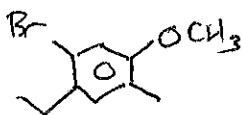
June 10, 2020

May 18th, 2020

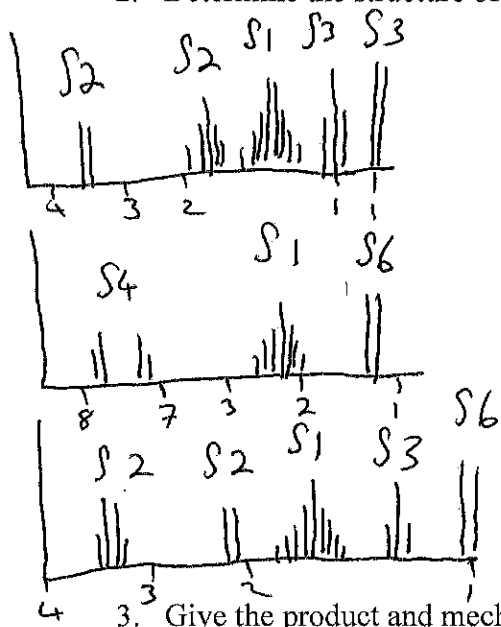
Exam #3

Name: _____

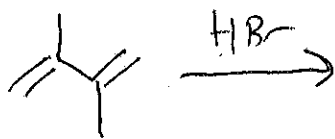
1. Name the following molecules:




2. Determine the structure of the following molecules from their NMR.



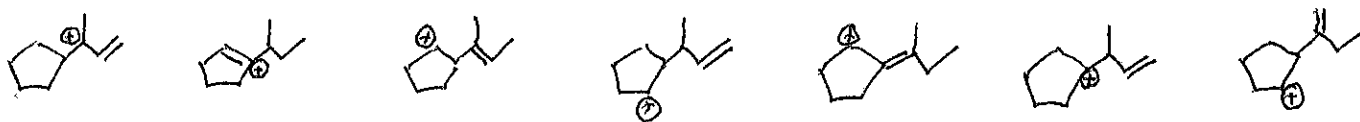
3. Give the product and mechanism of the following:



(thermodynamic product)



4. Rank the following according to stability, giving a 1 to the most stable.



5. Complete the following reactions:

